
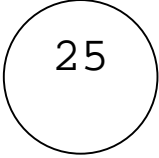
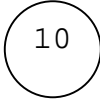





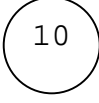


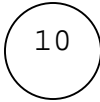



Nom : _____

Man. 6 Ex. 1

Fais un X sur la pièce qui vaut le plus cher.

Nom : _____

Man. 6 Ex. 2

Mets les pièces en ordre de valeur sur la ligne.



1

25

10

1\$

5

5

2\$

10

25



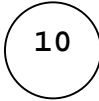

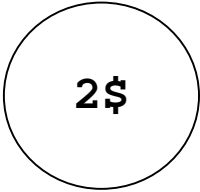
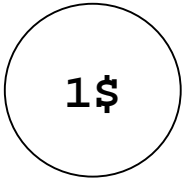
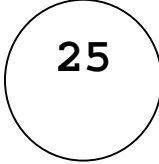
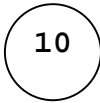

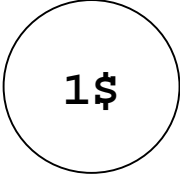

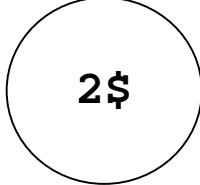
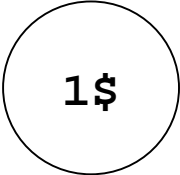
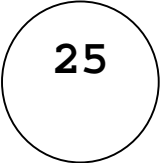

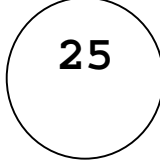
1

1\$

Nom : _____

Man. 6 Ex. 3


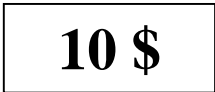
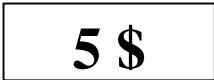











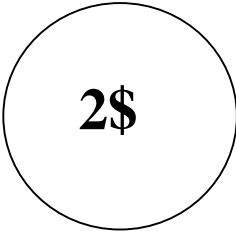

Fais un X sur la pièce qui vaut le plus cher.

 5	 1	 10	 5
 2\$	 1\$	 25	 10
 1	 1\$	 10	 2\$
 1\$	 25	 5	 25

Nom : _____

Man. 6 Ex. 4

Fais un X sur la pièce ou le billet
qui vaut le moins cher.

 10	 10 \$	 5 \$	 25
 10	 5	 1\$	 1
 10	 20 \$	 25	 2\$
 10 \$	 20 \$	 2\$	 10 \$

Nom : _____

Man. 6 Ex. 5

Dessine la pièce ou le billet
qui a la même valeur.

$$\boxed{10\$} \quad \boxed{10\$} =$$

$$\bigcirc 2\$ \quad \bigcirc 2\$ \quad \bigcirc 2\$ \quad \bigcirc 2\$ \quad \bigcirc 2\$ =$$

$$\bigcirc 1\$ \quad \bigcirc 1\$ \quad \bigcirc 1\$ \quad \bigcirc 1\$ \quad \bigcirc 1\$ =$$

$$\bigcirc 1\$ \quad \bigcirc 1\$ =$$

$$\boxed{5\$} \quad \bigcirc 1\$ \quad \bigcirc 1\$ \quad \bigcirc 1\$ \quad \bigcirc 1\$ \quad \bigcirc 1\$ =$$

$$\boxed{5\$} \quad \bigcirc 2\$ \quad \bigcirc 2\$ \quad \bigcirc 1\$ =$$

$$\boxed{5\$} \quad \boxed{5\$} \quad \boxed{5\$} \quad \boxed{5\$} =$$

$$\bigcirc 2\$ \quad \bigcirc 2\$ \quad \bigcirc 1\$ =$$