
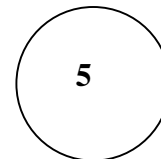


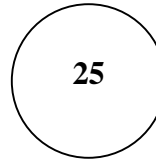
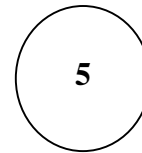

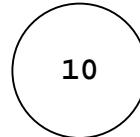


Nom : _____

Man. 3 Ex. 1

Relie chaque pièce avec son symbole.



Nom : _____

Man. 3 Ex. 2

Relie chaque pièce
ou billet avec son symbole.



10

2\$

25

5

10



20

1

5

1\$

Nom : _____

Man. 3 Ex. 3

Dessine le symbole de chaque pièce ou billet.

